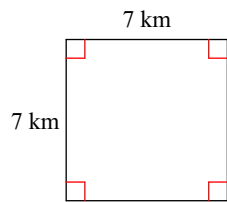


## Homework 1.1 Due 9/9 or 9/10

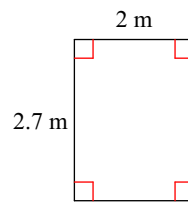
Date \_\_\_\_\_ Period \_\_\_\_\_

**Find the area and perimeter of each.**

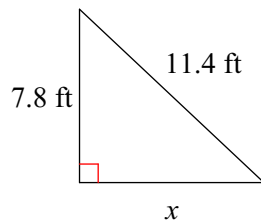
1)



2)

**For problems 3 and 4:****a) Find the missing side of each triangle. Round to two decimal places, if necessary.****b) Find the area and perimeter of each triangle.**

3)



4)

