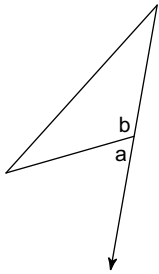


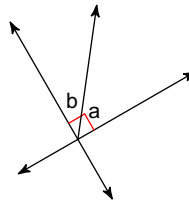
HW 2.5 Due 10/14 or 10/15

Name the relationship: complementary or supplementary.

1)

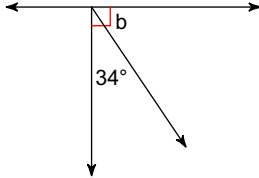


2)

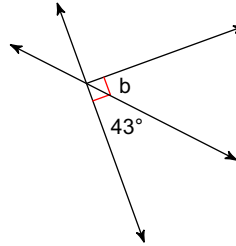


Find the measure of angle b.

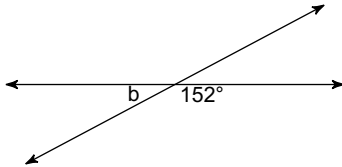
3)



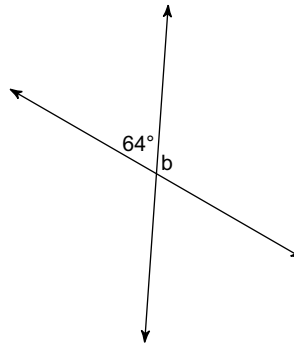
4)



5)

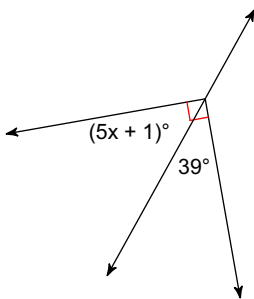


6)



Find the value of x.

7)



8)

