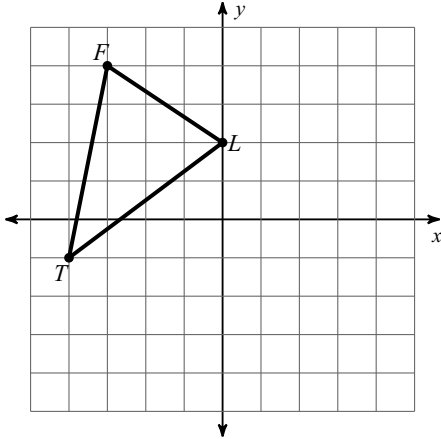


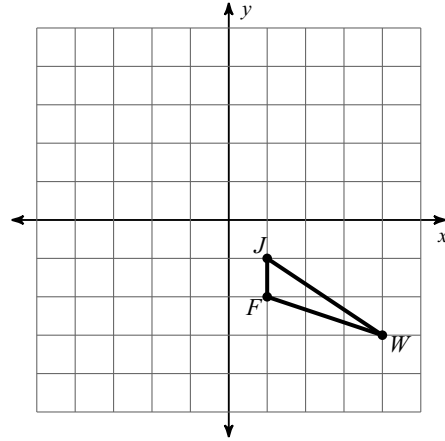
HW 2.7 Due 10/28 or 10/29

Graph the image of the figure using the transformation given.

1) rotation 90° counterclockwise about the origin

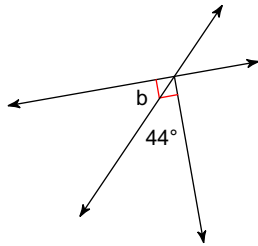


2) reflection across $y = -1$

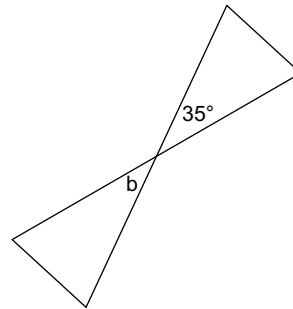


Find the measure of angle b.

3)

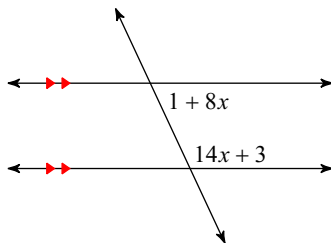


4)

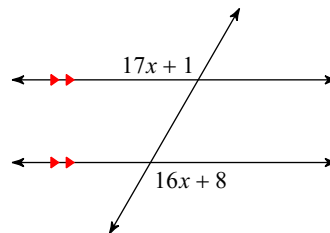


Solve for x.

5)

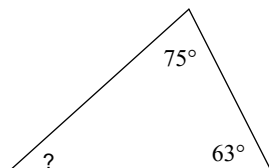


6)



Find the measure of each angle indicated.

7)



Solve for x.

8)

