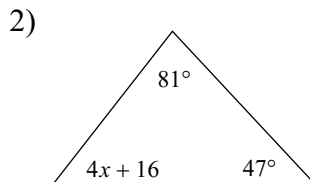
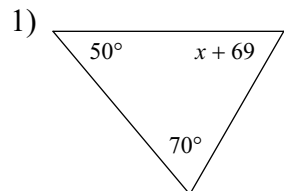


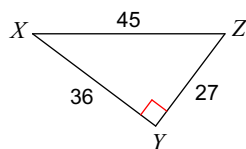
HW 4.2 Due 12/1 or 12/2

Solve for  $x$ .

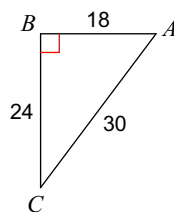


Find the value of each trigonometric ratio. Write it as a fraction or decimal.

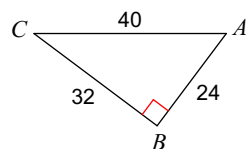
3)  $\sin X$



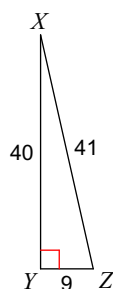
4)  $\tan C$



5)  $\cos A$



6)  $\sin Z$



Find the value of each trigonometric ratio to the nearest hundredth (2 decimal places).

7)  $\sin 16^\circ$

8)  $\sin 65^\circ$

9)  $\tan 42^\circ$

10)  $\sin 38^\circ$