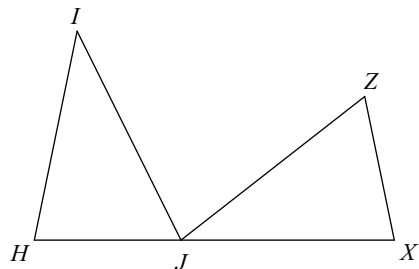


HW 5.5 Due 2/11 or 2/12

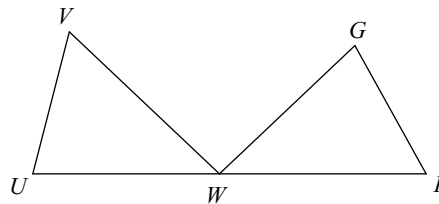
Complete each congruence statement by naming the corresponding angle or side.

1) $\triangle HIJ \cong \triangle XJZ$



$\overline{JH} \cong ?$

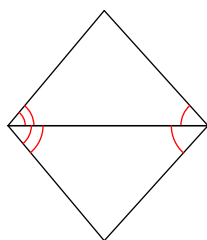
2) $\triangle UVW \cong \triangle GFW$



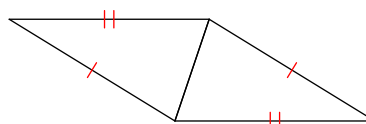
$\angle VWU \cong ?$

Make a flow chart or two-column proof to show whether or not the triangles are congruent.

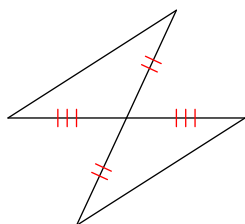
3)



4)



5)



6)

