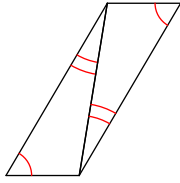


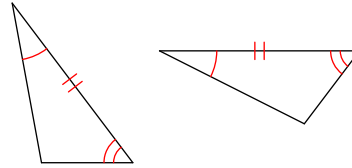
HW 5.6 Due 2/16 or 2/17

Make a flow chart or two-column proof to show whether or not the triangles are congruent.

1)

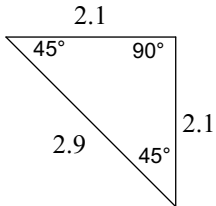


2)

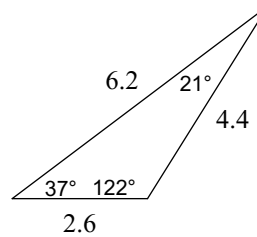


Classify each triangle by its angles and sides.

3)

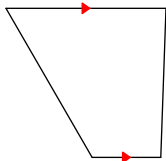


4)

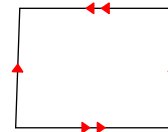


State the most specific name for each figure.

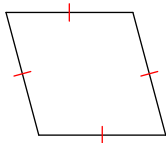
5)



6)



7)



8)

