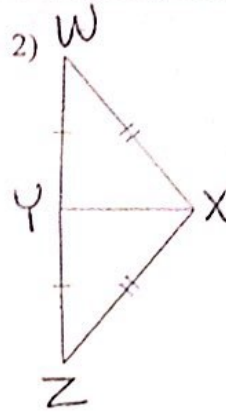
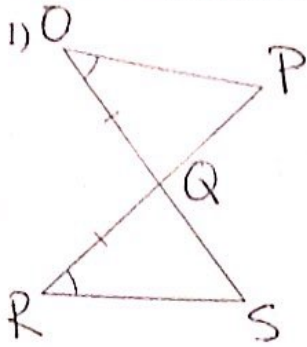
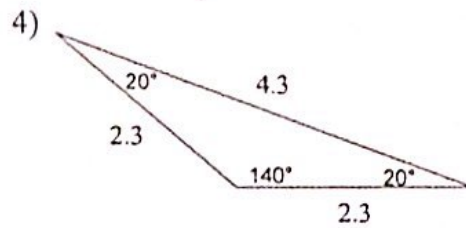
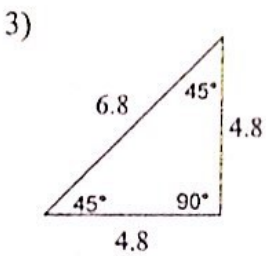


HW 5.9 Due 2/24 and 2/25

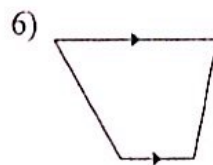
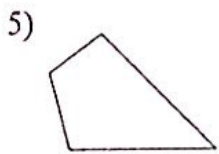
Make a flowchart or two-column proof to prove the triangles are congruent.



Classify each triangle by its angles and sides.



State the most specific name for each figure.



Find the measure of each angle indicated.

