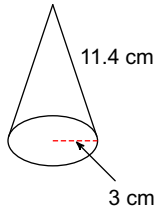


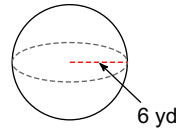
HW 8.3 Due 4/26 or 4/27

Find the surface area of each figure. Round your answers to the nearest hundredth, if necessary.

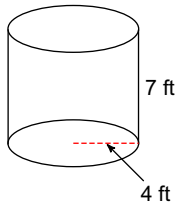
1)



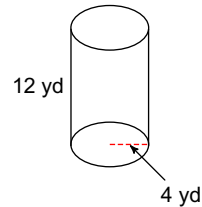
2)



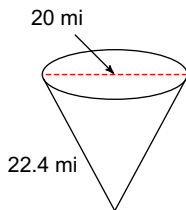
3)



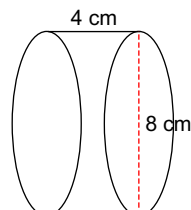
4)



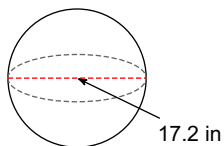
5)



6)



7)



8)

