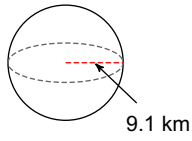


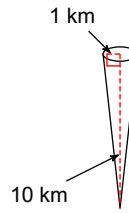
HW 8.4 Due 4/28 or 4/29

Find the volume of each figure. Round your answers to the nearest hundredth, if necessary.

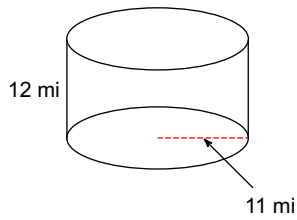
1)



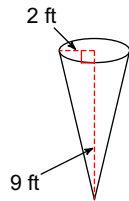
2)



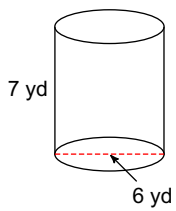
3)



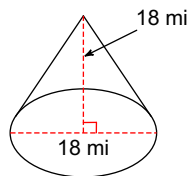
4)



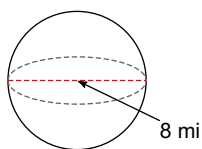
5)



6)



7)



8)

