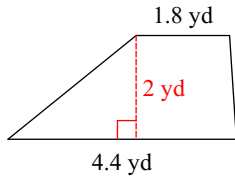


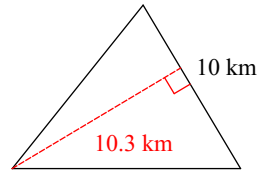
HW R.1

Find the area of each. Round each number to the hundredth place.

1)

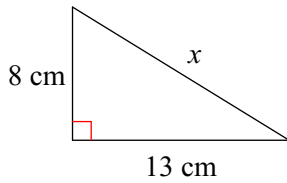


2)

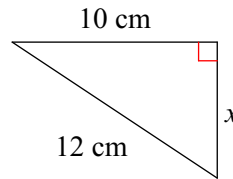


Find the missing side of each triangle. Round your answer to the hundredth place. Find the area of each triangle.

3)

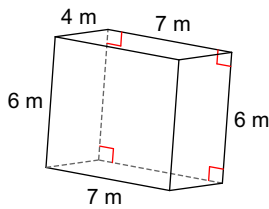


4)



Find the surface area of each figure. Round your answers to the nearest hundredth, if necessary.

5)



6)

